



Count the amount of each of the different objects.


1)



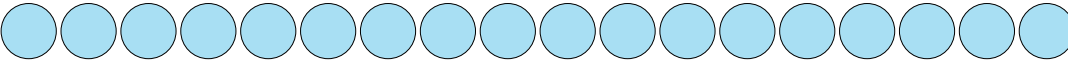
2)



3)



4)




5)



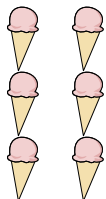
6)



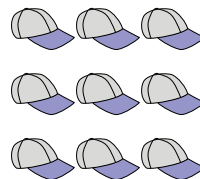
7)



8)



9)



Answers

1. \_\_\_\_\_

2. \_\_\_\_\_

3. \_\_\_\_\_

4. \_\_\_\_\_

5. \_\_\_\_\_

6. \_\_\_\_\_

7. \_\_\_\_\_

8. \_\_\_\_\_

9. \_\_\_\_\_



Count the amount of each of the different objects.


1)



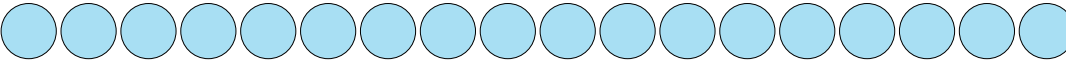
2)



3)



4)




5)



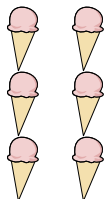
6)



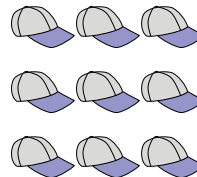
7)



8)



9)



Answers

1. 7

2. 11

3. 10

4. 18

5. 4

6. 19

7. 8

8. 6

9. 9